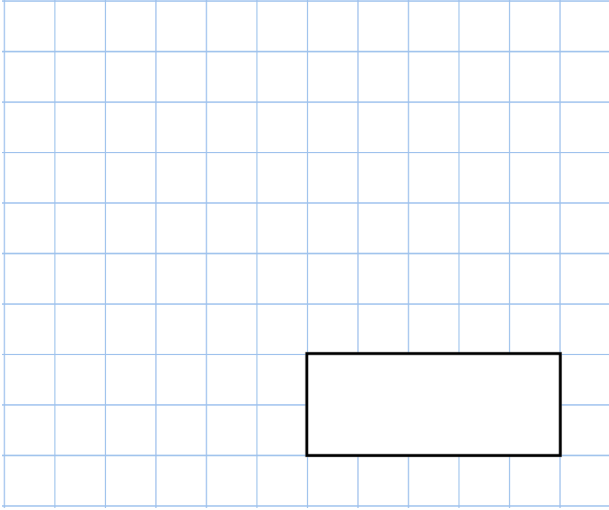


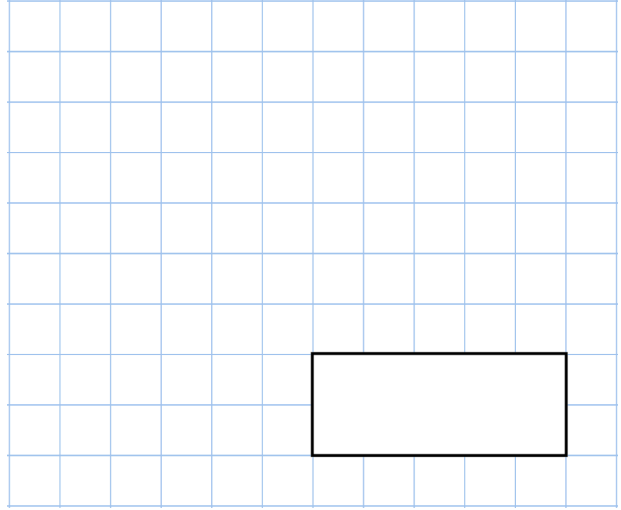


22nd May

$$40 - 16$$



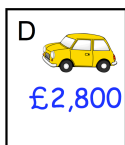
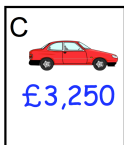
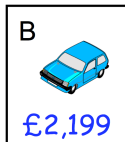

$$6 \times 10 = 20 \times \square$$



Maddie has a bag of 52 marbles.

$\frac{1}{2}$ of the marbles are green.

How many marbles are green?



Put these cars in order of price, starting with the **highest price**.

Circle the letter below that has parallel lines

C Z T X S

