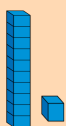



I can add 2 digit numbers using Dienes

	Tens	Ones
+		


Use your home-made paper Dienes blocks to help you!

Use your home-made paper Dienes blocks to help you!



	Tens	Ones
+		


Use your home-made paper Dienes blocks to help you!



+

Tens	Ones

Use your home-made paper Dienes blocks to help you!



+

Tens	Ones

On some paper complete these questions

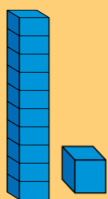
Draw tens and ones to help you work out the answers

a) $14 + 11 =$ e) $41 + 36 =$

b) $13 + 16 =$ f) $52 + 26 =$

c) $22 + 36 =$ g) $54 + 45 =$

d) $32 + 27 =$ h) $73 + 26 =$



Use your home-made paper Dienes blocks to help you!

Amir has 11 sweets.

Esther has 14 more sweets than Amir.

How many sweets does Esther have?

How many sweets do they have together?